


Mr. G's Math Marvels


Handout #23: Measurement

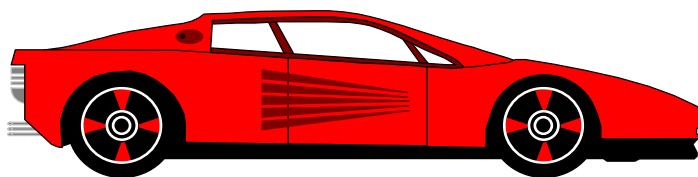
Measure the length of the following objects to the nearest $\frac{1}{2}$ inch.














Now measure each of the objects to the nearest quarter inch.

rabbit _____

alligator _____

bear _____

fish _____

car _____

dinosaur _____

Create line segments on the back of this paper that measure: $3\frac{1}{2}$ inches, $4\frac{1}{4}$ inches, $1\frac{3}{4}$ inches, $6\frac{3}{4}$ inches, and $1\frac{3}{4}$ inches.